

GCSE Biology A (Gateway)

J247/02 B4-B6 and B7 Foundation (Foundation Tier)

Question Set 9

1

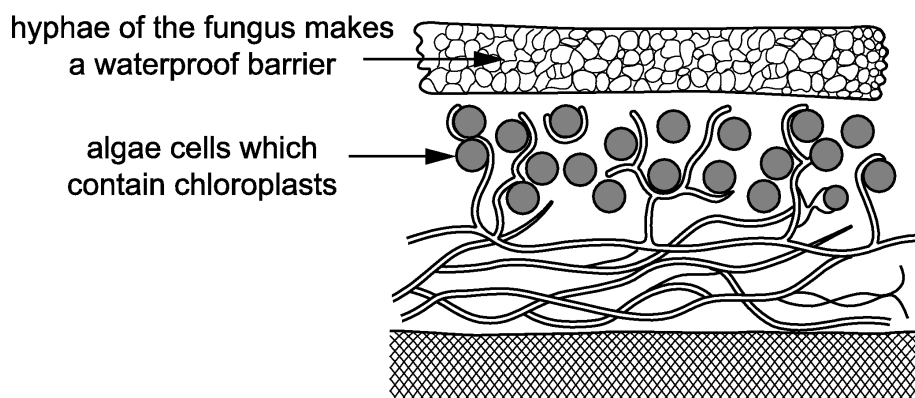
Some students are investigating lichens.
Lichens are often studied because they are sensitive to pollution.

- (a) Lichens are made up of two different organisms: fungus and algae.
Fungi and algae gain from living together.

What biological name is given to a relationship where both organisms gain?

[1]

- (b) The students find a diagram of a lichen.



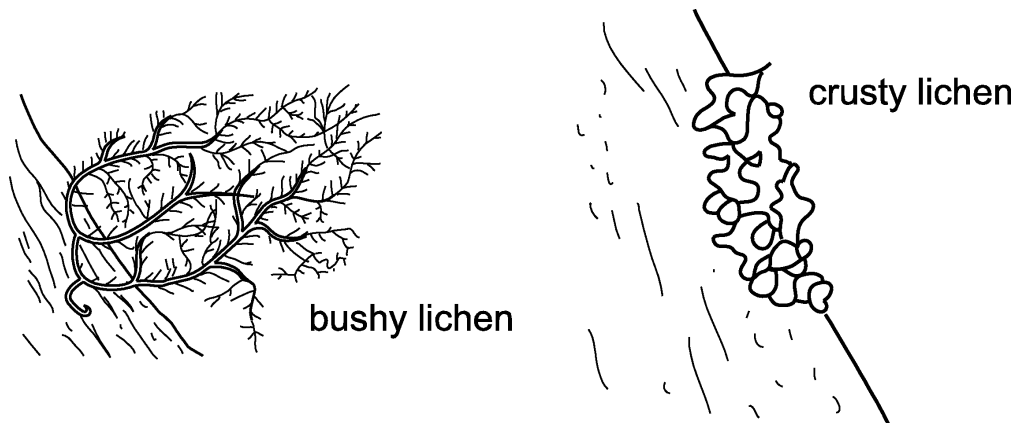
Using the diagram, suggest what the algae and fungus each gain from their relationship.

Algae

Fungus

[2]

- (c) Lichens are sensitive to pollution because they take up chemicals from the air. The diagram shows a 'bushy' species of lichen and a 'crusty' species of lichen.



Bushy lichens are usually more sensitive to pollution than crusty lichens. Use the diagrams to suggest why.

[1]

- (d) The students decide to use lichens to try and work out how polluted their school grounds are.

They read about a scale called the Lichen Diversity Value (LDV).

LDV is worked out in this way.

Step 1 Choose four trees in the area.

Step 2 Hold a quadrat on the north side of the trunk of one tree.

Step 3 Count the total number of all the lichens in the quadrat.

Step 4 Repeat **steps 1–3** on the east, south and west side of the tree.

Step 5 repeat **steps 1–4** for each tree.

- (i) Suggest how the students could choose the four trees in **step 1**.

[1]

(ii) The students record their results in a table.

Tree number	Total number of lichens found in each quadrat			
	North	East	South	West
1	3	11	18	7
2	4	12	17	8
3	5	10	15	12
4	4	15	12	9
mean	4.0	12.0	15.5

The LDV is found by adding together the four mean values.

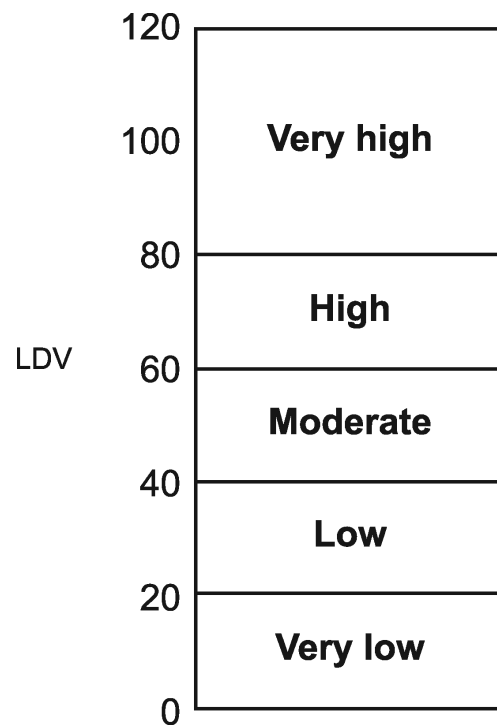
The students calculate the mean number of lichens on the north, east and south sides of the trees.

- Calculate the mean value for the west side and add it to the table.
- Calculate the LDV.

LDV =

[2]

(iii) This scale shows the type of diversity shown by the LDV.



What does the LDV show about the amount of diversity in the school grounds?

[2]

(iv) LDV is calculated by counting all the lichens present.

The students want to make a better assessment of pollution.

What else about the lichens could the students look for?

[3]

Total Marks for Question Set 9: 12

OCR

Oxford Cambridge and RSA

Copyright Information

OCR is committed to seeking permission to reproduce all third-party content that it uses in its assessment materials. OCR has attempted to identify and contact all copyright holders whose work is used in this paper. To avoid the issue of disclosure of answer-related information to candidates, all copyright acknowledgements are reproduced in the OCR Copyright Acknowledgements Booklet. This is produced for each series of examinations and is freely available to download from our public website (www.ocr.org.uk) after the live examination series.

If OCR has unwittingly failed to correctly acknowledge or clear any third-party content in this assessment material, OCR will be happy to correct its mistake at the earliest possible opportunity.

For queries or further information please contact The OCR Copyright Team, The Triangle Building, Shaftesbury Road, Cambridge CB2 8EA.

OCR is part of the Cambridge Assessment Group; Cambridge Assessment is the brand name of University of Cambridge Local Examinations Syndicate (UCLES), which is itself a department of the University of Cambridge